

Ask the tool from the children who are at word level in English

Q1: Look at the picture and answer accordingly.

(I) What is the girl doing in the picture?

- (a) Jumping
- (b) Playing
- (c) Washing



(II) Who works in the fields?

- (a) Doctor
- (b) Farmer
- (c) Teacher



Q2: Complete the sentence by replacing pictures with words.

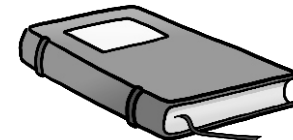
I see a _____



I see a _____



I see a _____



Ask the child to see the picture and then ask two questions from the child. Mark “yes” if the child answer correctly, otherwise mark as “no”.

Ask the child to complete the sentences by identifying the picture of the items drawn on the sample (in English). If a child answers any two correctly, mark him/her “yes”, otherwise “no”.

Sample 1

Math

Sample 1

Q1 Which is the largest number?

- (a) 5
- (b) 16
- (c) 7
- (d) 13

س1 کونسا نمبر سب سے بڑا ہے؟

- ا۔ 5
- ب۔ 16
- ج۔ 7
- د۔ 13

Q2 Saba has 8 mangoes. She ate 3.
How many are left?



- (a) 3
- (b) 5
- (c) 7
- (d) 9

س2 صبا کے پاس 8 آم تھے۔ 3 اُس نے کھائے۔ باقی کتنے رہتے ہیں؟



- ا۔ 3
- ب۔ 5
- ج۔ 7
- د۔ 9

Q3 There are 42 shops in a building. Only 24 are open.
How many shops are closed?

س3 ایک عمارت میں 42 دکانیں ہیں۔ جس میں صرف 24 کھلی ہیں۔

کتنی دکانیں بند ہیں؟

Ask from all children (5-16 years)

If a child attempts the questions correctly, mark him/her as a “yes” child, otherwise mark as “no”.

Ask the tool from the children who are at word level in English

Q1: Look at the picture and answer accordingly.


(I) What is the man reading in the picture?

- (a) Book
- (b) Newspaper
- (c) Diary




(II) What is the woman doing in the picture?

- (a) Cleaning
- (b) Washing
- (c) Cooking




Q2: Complete the sentence by replacing pictures with words.


I see a _____



I see a _____



I see a _____



Ask the child to see the picture and then ask two questions from the child. Mark “yes” if the child answer correctly, otherwise mark as “no”.

Ask the child to complete the sentences by identifying the picture of the items drawn on the sample (in English). If a child answers any two correctly, mark him/her “yes”, otherwise “no”.

Sample 2

Math

Sample 2


Q1 Which is the largest number?

- (a) 4
- (b) 15
- (c) 8
- (d) 17

س1 کونسا نمبر سب سے بڑا ہے؟


- ا۔ 4
- ب۔ 15
- ج۔ 8
- د۔ 17

Q2 Ali has 9 pencils. 3 are lost. How many are left?



- (a) 2
- (b) 6
- (c) 4
- (d) 3

س2 علی کے پاس 9 پنسلیں ہیں۔ 3 گم ہو گئیں۔ کتنی پنسلیں باقی رہ گئیں؟



- ا۔ 2
- ب۔ 6
- ج۔ 4
- د۔ 3

Q3 There are 45 students in a class. 26 are girls.
Find the number of boys.

س3 ایک کلاس میں 45 طالب علم ہیں۔ ان میں سے 26 لڑکیاں ہیں۔

لڑکوں کی تعداد معلوم کریں؟

Ask from all children (5-16 years)

If a child attempts the questions correctly, mark him/her as a “yes” child, otherwise mark as “no”.